

Name: _____

Morning Math

Write the date.

_____ , _____ , _____

_____ , _____ , _____





Determine the missing numbers.

| | | |
|---------------------|---------------------|---------------------|
| $52 + 38 = \square$ | $17 + 78 = \square$ | $\square = 33 - 19$ |
|---------------------|---------------------|---------------------|

Color in two different ways to show the amount.

A collection of US coins including quarters, dimes, nickels, and pennies. In the center is a jar with a lid and a label that says "55c".

Write <, > or = in the jar to compare.

| | |
|---|---|
| 208  802 | 722  722 |
| 289  298 | 837  738 |

Show the time.

An analog clock showing 9:25 and a digital clock showing 9:25.

It is nine twenty five.

Solve the problem.

| | |
|---|--|
| Tom had 55 flower seeds but then lost some. If he now only has 38 flower seeds, how many did he lose? | |
|---|--|